


AIDAT

All India Design Aptitude Test



MOCK TEST PAPER

2

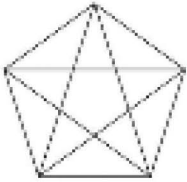
TOTAL MARKS:100

TOTAL TIME:- 1Hr.

Q.1 Which Indian state is renowned for its Warli paintings?

- a) Rajasthan b) Maharashtra c) West Bengal d) Tamil Nadu

Q.2 How many triangles are there in figure ?



- a) 35 b) 14 c) 25 d) 20

Q.3 Identify this World Heritage Site, which is located in Karnataka, India.



- a) Agasen ki Baoli b) Raniji ki Baori
c) Hampi d) Virupaksha Temple

Q.4 In 2023, which virus led to a global health crisis, prompting widespread vaccination campaigns?

- a) Yellow Fever b) COVID c) Influenza d) Ebola

Q.5 In textile design, what is the term for a pattern that uses multiple shades and tones of a single color?

- a) Ombre b) Paisley c) Chevron d) Houndstooth

Q.6 Identify this famous print.



- a) Block printing b) Bandhani
c) Embroidery d) Batik

Q.7 The Kalbelia dance form is linked to which Indian state's cultural heritage?

- a) Maharashtra b) Goa c) Gujrat d) Rajasthan

Q.8 What feature in Microsoft Word allows you to add information such as page numbers and document titles at the top or bottom of each page?

- a) Footnotes b) Watermark c) Headers and Footers
d) Endnotes

Q.9 Identify the home country of these children's.



- a) Indonesia b) Bahrain c) Sri Lanka d) Thailand

Q.10 A street has 13 houses in a row as shown in a figure. Some residents in the first house tested positive for V – Virus . The virus spreads in 2 ways: it can spread to the next house, or jump directly to the third house. Residents of house number 2 can get infected in only one way, the house number 3 in 2 ways, the house number 4 in 3 ways, the house number 5 in 5 ways and so on. If the virus only progresses from left to right direction, in how many ways can residents of the house number 13 get infected ?

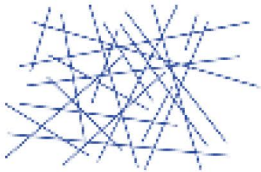


- a) 20 b) 13 c) 233 d) 224

Q. 11 Which of the following pairs have no association with each other?

- a) Honey and Bear
- b) Design and Prototype
- c) Computer and Car
- d) Bat and night

Q.12 How many lines are there in given below image ?



- a) 25
- b) 22
- c) 21
- d) 19

Q.13 Goethe said, "Doubt grows with knowledge". From this perspective, who would a knowledgeable person be?

- a) One for whom doubt does not grow with knowledge
- b) One who has no more doubt
- c) One who has more than 1 doubt
- d) One whose doubt grows with knowledge

Q.14 Which element of design involves the perceived lightness or darkness of a color?

- a) Hue
- b) Saturation
- c) Value
- d) Intensity

Q.15 Which folk art form uses stylized masks and is performed during religious ceremonies in the state of West Bengal?

- a) Bihu dance
- b) Chhau dance
- c) Theyyam
- d) Kathak

Q.16 Choose the pair from the options given that best represents a similar relationship to the one expressed in the original pair of words.

DEMONSTRATIVE : RESERVERD

- a) Boisterous : Quiet
- b) Arrogant : Humble
- c) Gregarious : Introverted
- d) Spontaneous : Deliberate

Q. 17 Which concept does this image by Escher illustrate ?



- a) Tessellation
- b) Landscape
- c) Mise en Scène
- d) Collage

Q.18 Given below is a series of numbers. Which number will replace the question mark ?

101, 103, 107, 109, ? , 127, 131, 137,139, 149, 151, 157

- a) 113
- b) 111
- c) 119
- d) 117

Q.19 Which of the following statements would you consider to be TRUE about the hour and minute hands of analogue clocks?

- a) The minute hand moves 12 times faster than the hour hand.
- b) The hour hand and the minute hand would make 90 degree angle with each other 24 times in a day
- c) The hour hand and minute hand will overlap less than 24 times in a day
- d) The hour hand moves faster than the minute hand.

Q.20 Which letter is NEVER used while printing the calendar mentioning names of all the days of the week and months in full form ?

- a) W
- b) G
- c) K
- d) V

Q.21 Which natural fabric is derived from the silkworm's cocoon?

- a) Wool
- b) Cotton
- c) Silk
- d) Linen

Q. 22 What is the formula for finding the circumference (C) of a circle?

- a) $C = \pi r^2$ b) $C = 2 \pi r$ c) $C = 1/2 \text{ base} \times \text{height}$ d) $C = s^2$

Q.23 In PowerPoint, what is the purpose of the Master Slide?

- a) Apply design elements consistently across all slides
b) Create hyperlinks between slides
c) Insert audio and video files
d) Edit individual slide layouts

Q.24 Associate the following pictures with one of the moods given below:



- a) Anger b) Youthful c) Melancholic d) Agitated

Q.25 In J.K. Rowling's Harry Potter series, what is the name of Harry's owl?

- a) Hagrid b) Errol c) Crookshanks d) Hedwig

Q.26 Which instrument does Yo-Yo Ma play?

- a) Violin b) Piano c) Cello d) Flute

Q.27 The Mexican artist known for her self-portraits and works such as "The Two Fridas" is:

- a) Frida Kahlo b) Diego Rivera c) Pablo Picasso d) Georgia O'Keeffe

Q. 28 Bharatanatyam, Kathak, Kuchipudi, Odissi, and Manipuri are all.....

- a) Rivers in India b) Classical dance forms c) Types of Indian spices
d) Traditional clothing styles

Q.29 In Japan, the color white symbolizes mourning and funerals, while in many Western cultures, it represents:

- a) Purity and innocence
- b) Celebration and joy
- c) Danger and warning
prosperity
- d) Wealth and

Q.30 If the scale factor between two similar figures is 2:3, and the area of the smaller figure is 36 cm^2 , what is the area of the larger figure?

- a) 24 cm^2
- b) 54 cm^2
- c) 72 cm^2
- d) 108 cm^2

Q.31 If colour and size differences are not to be counted as unique, How many types of leaves occur only once ?



- a) 2
- b) 4
- c) 6
- d) 0

Q.32 What is the significance of the "analogous colors" scheme?

- a) High-contrast color combination
- b) Colors located opposite each other on the color wheel
- c) Colors adjacent to each other on the color wheel
- d) Use of only black and white

Q.33 What comes next in the following letter sequence: S O N D J F?

- a) M
- b) Z
- c) K
- d) L

Q.34 The Renaissance artist known for painting the Mona Lisa and The Last Supper was:

- a) Leonardo da Vinci b) Michelangelo c) Raphael d) Donatello

Q. 35 The Indus Valley Civilization was primarily located in which present-day country?

- a) India b) Pakistan c) Bangladesh d) Afghanistan

Q.36 'Bank' is related to 'Money' in the same way 'Transport' is related to

- a) Goods b) Road c) Movement d) Traffic

Q.37 Ten years ago A was half of B in age. If the ratio of their present ages is 3:4 what will be the total of their present ages?

- a) 8 yr b) 20 yr c) 30 yr d) None of these

Q. 38 Raja Ravi Verma, was famous in which of the fields?

- a) Painting b) Politics c) Dance d) Music

Q.39 A word has been written in four different ways out of which only one is correctly spelt. Find the correctly spelt word.

- a) Enterpreneur b) Entrepreneur c) Entrepreneuer d)Entreprneur

For Questions 40 to 42, refer to the color image 'A' shown below:



Q.40 The above sculpture is made by which artist ?

- a) Georges Braque
- b) Albert Gleizes
- c) Albert Gleizes
- d) Pablo Picasso

Q.41 What symbolic significance is often attributed to this sculpture ?


- a) Exploration of color theory
- b) Representation of natural landscapes
- c) Reflection on the passage of time
- d) Expression of political ideologies

Q.42 What materials did primarily use to create this sculpture?

- a) Metal and wood
- b) Glass and ceramics
- c) Paper and cardboard
- d) Stone and marble

Q.43 The following is an example of.....

- a) Miniature painting from Rajasthan
- b) Tanjore painting from Karnataka
- c) Kalamkari from Andhra Pradesh
- d) Gond Art from Central India



Q.44 Art Deco evolved during..... period.

- a) 1700-1800
- b) 1919 - 1939
- c) 1885-1910
- d) 2000-2010

Q.45 Child labour has become a _____ burning issue for the _____ few past.

- a) subtle, past
- b) particularly, gone
- c) particularly, past
- d) dirty, next

Q.46 "The influential design principle 'Form follows function' is attributed to:

- a) Le Corbusier
- b) Frank Lloyd Wright
- c) Louis Sullivan"
- d) Ludwig Mies van der Rohe

Q.47 "Who is often referred to as the 'Father of Indian Modern Art'?"

- a) M.F. Husain
- b) Lord Bentinck
- c) Jamini Roy
- d) Raja Ravi Varma

Q.48 What is a special, high-quality kind of fashion called?

- a) Ready-to-wear
- b) Streetwear
- c) Haute Couture
- d) Casual Wear

Q.49 All the locks are keys. All the keys are bats. Some watches are bats

- Conclusions:
- 1. Some bats are locks.
 - 2. Some watches are keys.
 - 3. All the keys are locks.

- a) Only (1) and (2)
- b) Only (1)
- c) Only (2)
- d) Only (1) and (3)

Q. 50 The minimum age required to become a member of Rajya Sabha is

- a) 21 years b) 25 years c) 30 years d) 35 years

Q.51 "A car can travel with a speed of 60 km/hr on a highway. If the speed of the car is reduced to 40 km/hr due to traffic, find the time taken by the car to cover 120 km on the highway.

- a) 1.5 hours b) 2.5 hours c) 2 hours d) 3 hours

Q.52 "If a clock strikes 6 taking 15 seconds, in order to strike 12 at the same rate, the time taken will be:

- a) 30 seconds b) 45 seconds c) 60 seconds d) 40 seconds

Q.53 What does the acronym "URL" stand for?

- a) Uniform Resource Locator
b) Universal Reference Locator
c) Unified Retrieval Link
d) User Recognition Language

Q. 54 Which film won the Best Picture award at the 2023 Academy Awards?

- a) The Power of the Dog b) Dune c) CODA d) Belfast

Q.55 What design tool is a visual representation of a concept or idea, often used in the early stages of a project?

- a) Storyboard b) Wireframe c) Mockup d) Mood Board

Q.56 In a perspective drawing, what does the vanishing point represent?

- a) The point where objects are closest to the viewer
b) The point where parallel lines appear to converge
c) The center of the drawing canvas
d) The point where colors fade

Q.57 Which artist is famous for creating the iconic "Starry Night" painting?

- a) Leonardo da Vinci b) Vincent van Gogh
c) Pablo Picasso d) Georgia O'Keeffe

Q.58 What is the primary material used in the production of terracotta pottery?

- a) Porcelain b) Glass c) Plastic d) Clay

Q.59 Which region of India is renowned for the art of making Bidriware?

- a) Bidar b) Firozabad
c) Chennai d) Jaipur



Q. 60 What form of traditional Indian embroidery is characterized by vibrant colors and intricate mirror work?

- a) Kantha b) Chikankari
c) Phulkari d) Kutch Embroidery

Q.61 What material is used to make this craft item?



- a) Plastic
- c) Wood

- b) Bamboo
- d) Rattan / Cane

Q.62 Which of the following materials is not considered environmentally friendly?

- a) Bamboo
- b) Wood
- c) Cotton
- d) Styrofoam

Q.63 What city in India is celebrated for its distinct leather craftsmanship, including items like Mojris and bags?

- a) Jaipur
- b) Delhi
- c) Tokyo
- d) Rome

Q.64 Which of the following materials is not considered environmentally friendly?

- a) Bamboo
- b) Wood
- c) Cotton
- d) Styrofoam

Q.65 Who wrote the play "Romeo and Juliet"?

- a) William Wordsworth
- b) William Shakespeare
- c) Jane Austen
- d) Charles Dickens

Q.66 Which popular Indian Film pair of actor – actress is the promoter of “ Trends” , a fashion clothing range from the house of Reliance?

- a) Vicky Kaushal and Janhvi Kapoor
- b) Disha Patani and Tiger Shroff
- c) Tamanna Bhatia and Sidharth Malhotra
- d) Ayushmann Khurrana and Shraddha Kapoor

Q.67 In 2023, which city hosted the FIFA Women's World Cup?

- a) Australia and New Zealand
- b) London
- c) Sydney
- d) New York

Q.68 The Taj Mahal in India is predominantly made of which type of white marble?

- a) Carrara marble
- b) Pentelic marble
- c) Vermont marble
- d) Makrana marble

Q.69 Which company released the first consumer-grade digital camera in 1994?

- a) Kodak
- b) Nikon
- c) Sony
- d) Samsung

Q.70 Which chart type in Excel is best for showing the relationship between two variables?

- a) Pie chart
- b) Bar chart
- c) Line chart
- d) Scatter plot

Q.71 What is "White Space" also known as?

- a) Transparent space
- b) Negative space
- c) Empty space
- d) Blank space

Q.72 Which part of bamboo is commonly used for construction purposes and as a building material?

- a) leaves
- b) Roots
- c) Stem (Clums)
- d) Flowers

Q.73 What is the term for a surgical procedure that involves the removal of a limb or a part of a limb?

- a) Amputation
- b) Transplantation
- c) Resection
- d) Grafting

Q.74 In a right-angled triangle, if one angle is 30 degrees, what is the measure of the other acute angle?

- a) 30 degrees degrees b) 45 degrees c) 60 degrees d) 90 degrees

Q.75 The traditional art form of "Madhubani" is native to which Indian state?

- a) Bihar b) Rajasthan c) Gujarat d) Odisha

Q.76 Which of the following is a popular music streaming platform?

- a) Netflix b) Spotify c) Instagram d) WhatsApp

Q.77 In a zoo, the rabbits and pigeons are kept together in a room. If heads are counted, then number of heads is 100; but if all the legs are counted, then numbered of legs is 288. The number of pigeons is

- a) 56 b) 44 c) 50 d) 65

Q.78 In design for print, which color mode is used for full-color printing?

- a) CMYK b) RGB c) Grayscale d) CMCK

Q.79 What is Pantone?

- a) A type of fabric system b) A color matching system
c) A clothing brand d) A design software

Q.80 Which automaker produces the "Mustang" and "F-150" models?

- a) Chevrolet b) Ford c) Toyota d) Honda

Q.81 Identify the next shape in the pattern: \square , \blacklozenge , \bullet , \triangle , _____.

- a) ★ b) ○ c) ■ d) ★★

Q.82 If a paper is folded and a hole is punched through it, what will the hole look like when the paper is unfolded?

- a) Square b) Triangle c) Circle d) Rectangle

Q.83 What is the definition of the term "Polychrome"?

- a) Having a single color b) Displaying multiple colors
 c) Lacking color d) Inverse of monochrome

Q.84 What is the term for the protective layer on the surface of wood that is commonly removed during sanding or planing?

- a) Bark b) Sapwood c) Heartwood d) Cambium

Q.85 Which synthetic fiber is known for its strength and resistance to wrinkles and shrinking?

- a) Rayon b) Nylon c) Polyester d) Acrylic

Q. 86 Identify this Art ...

- a) Nakashi Art b) Thewa Art
 c) Warli Painting d) Thanjavur painting



Q.87 Which of the following countries is the smallest by land area?

- a) Russia b) Canada c) Monaco d) Australia

Q.88 The ancient city of Babylon was located in which present-day country?

- a) Iraq b) Egypt c) Iran d) Syria

Q.89 What is the meaning associated with image below?

- a) Refrom b) Reply c) Replay d) Recycle



Q.90 What is the primary factor influencing the color of wood?

- a) Age of the tree b) Type of finish/applied
c) Type of wood d) Stain

Q.91 "Channapatna Toys," traditional wooden toys, are associated with which Indian state?

- a)Karnataka b) Kerala c) Punjab d) Maharashtra

Q.92 Which of the following is a tropical grassland?

- a) Taiga b) Savannah c) Pampas d) Prairies

Q.93 Identify the number that does not belong to the given series: 18, 27, 42, 56, 63.

- a) 18 b) 42 c) 56 d) 63

Q.94 The popular "Chiffon Saree" are made in.

- a) Rajasthan b) AndraPradesh
c) Himachal Pradesh d) Madhya Pradesh

Q.95 Identify the painting in the given picture.

- a) Gond b) Tanjore
c) Madhubani d) Varli



Q.96 What is the next letter in this sequence J F M A M J

- a) P b) S c) J d) T

Q.97 In printing, what does the acronym "CMYK" stand for?

- a) Cyan, Magenta, Yellow, Key b) Red, Green, Blue, Black
c) Color, Mode, Yellow, Key d) Cyan, Mint, Yellow, Black

Q.98 What is the sum of the interior angles of a hexagon?

- a) 90 degrees b) 120 degrees
c) 180 degrees d) 720 degrees

Q.99 What are the three primary colors in the traditional color wheel?

- a) Red, Green, Blue b) Cyan, Magenta, Yellow
c) Red, Yellow, Blue d) Orange, Green, Purple

Q.100 Identify the logo in the given picture.

- a) Volkswagen b) National Golf Club
c) Bajaj Motorcycles d) BYD





1 B	25 D
2 A	26 C
3 C	27 A
4 B	28 B
5 A	29 A
6 A	30 C
7 D	31 A
8 C	32 C
9 C	33 A
10 C	34 A
11 C	35 B
12 C	36 C
13 D	37 C
14 C	38 A
15 B	39 B
16 A	40 D
17 A	41 C
18 A	42 A
19 A	43 A
20 C	44 B
21 C	45 B
22 B	46 D
23 A	47 C
24 C	48 C

49 B	73 A
50 C	74 C
51 B	75 A
52 B	76 A
53 A	77 A
54 C	78 A
55 D	79 B
56 C	80 B
57 B	81 A
58 D	82 C
59 A	83 B
60 D	84 A
61 A	85 C
62 D	86 D
63 A	87 C
64 D	88 A
65 B	89 D
66 B	90 A
67 A	91 A
68 D	92 A
69 A	93 B
70 D	94 B
71 B	95 A
72 C	96 C

97 A	99 D
98 C	100 A